

Easter Revision Calendar



April

ACCESS MATHS

8 Write these numbers in size order:
-5, 0, 4, -7, 9

9 Write these numbers in size order:
0.51, 0.5, 0.501, 0.15

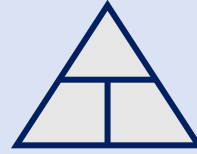
10 Round to 2 decimal places:
5.6565

11 Write this fraction as a percentage:
 $\frac{3}{10}$

12 How many minutes in 7.5 hours?

13 Work out:
 $34 \times \pounds 4.60$

14 Write the speed, distance & time formula



15 Estimate
 $648 \times 79p$

16 Simplify:
100:120

17 Simplify:
 $4x - 2y + 3x - 6y$

18 Work out:
 $\frac{2}{7} + \frac{1}{5}$

19 Solve:
 $6x + 2 = 5 - x$

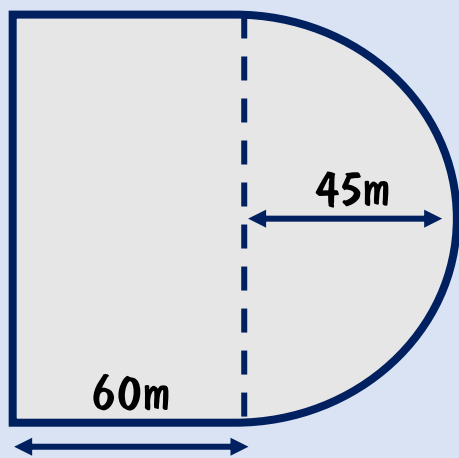
20 Share $\pounds 280$ in the ratio 3:4

21 Expand:
 $3x(4 - x)$

22 Expand and simplify:
 $(2m + 3)(3m - 1)$

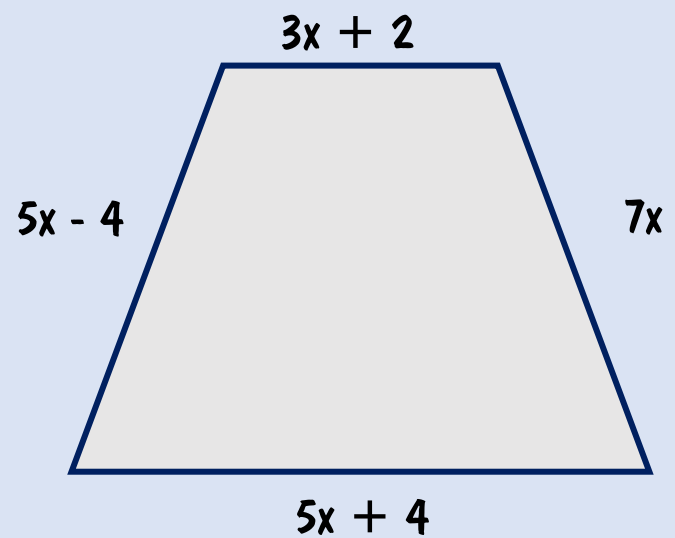
23 Change:
 $25,000\text{cm}^3$ into m^3

?



Work out the perimeter of this rectangle and semicircle. The semi-circle has a radius of 45m.

?



Write an expression for the perimeter of this trapezium. What is the perimeter when $x=3$

And Get Ready For The Final Stretch!!

Find somewhere quiet to work!

Identify the topics you need to work on!

@accessmaths
www.accessmaths.co.uk

Practice in small chunks every day!

Ask for help if you are still unsure!