

ACTION

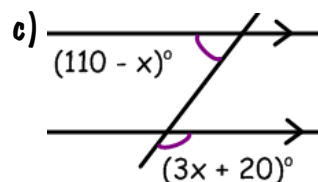
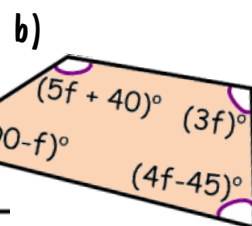
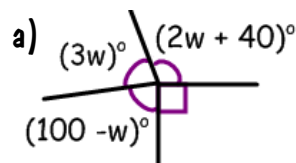
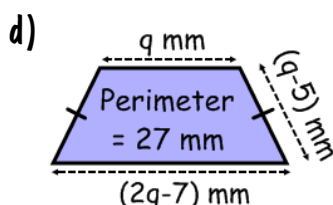
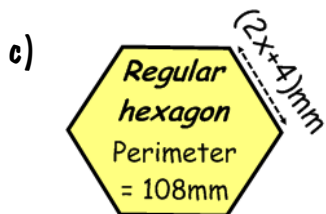
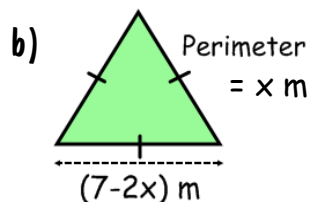
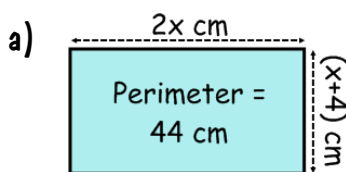
Revision Material



<http://corbettmaths.com/contents/>
Video 114 & 115

RESPONSE

1) Calculate the dimensions of each shape. 2) Work out the size of each angle.



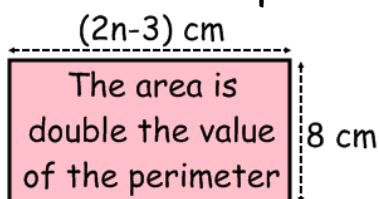
Fluency



Reasoning



1) Work out the area and perimeter. 2) Beth thinks of a number, adds 2 to it and then multiplies by 7. Harry thinks of the same number, multiplies it by 3 and then subtracts 10.



They both arrive at the same value.
Work out the number they started with.

Problem Solving



There are two jars of sweets.
If 20 are taken from the first jar and put into the second, they are in the ratio of 1:2
If 60 are now taken from the second and put into the first, they are in the ratio of 3:1
Work out the original amount in each.



ACTION

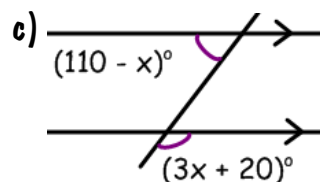
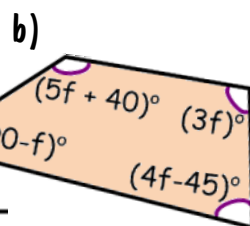
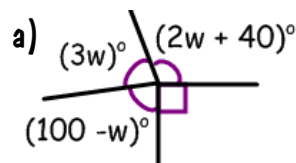
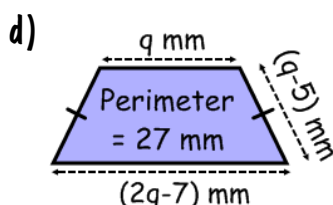
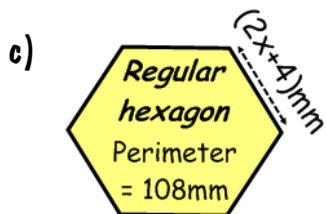
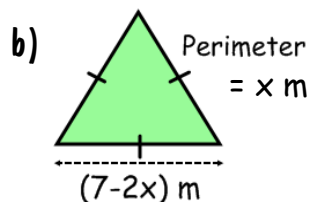
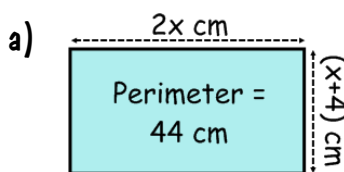
Revision Material



<http://corbettmaths.com/contents/>
Video 114 & 115

RESPONSE

1) Calculate the dimensions of each shape. 2) Work out the size of each angle.



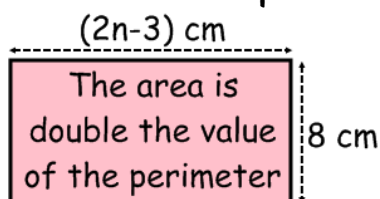
Fluency



Reasoning



1) Work out the area and perimeter.



2) Beth thinks of a number, adds 2 to it and then multiplies by 7. Harry thinks of the same number, multiplies it by 3 and then subtracts 10.

They both arrive at the same value.

Work out the number they started with.

Problem Solving



There are two jars of sweets.

If 20 are taken from the first jar and put into the second, they are in the ratio of 1:2

If 60 are now taken from the second and put into the first, they are in the ratio of 3:1

Work out the original amount in each.

