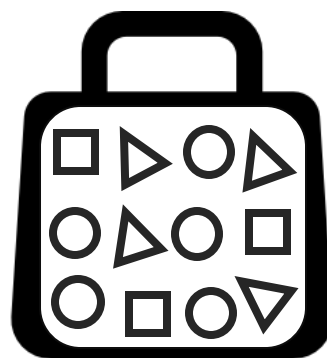


ACTION

RESPONSE

Write down the probability of picking the following:

- | | |
|---------------|-------------------------|
| 1. A circle | 4. A pentagon |
| 2. A triangle | 5. A square or circle |
| 3. A square | 6. A circle or triangle |



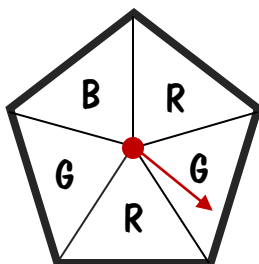
Fluency



Reasoning



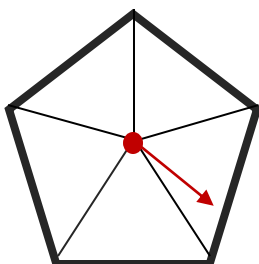
Which event is least likely? Which events are equally likely? Explain your answers:



Problem Solving



Design a spinner with 5 sectors where the probability of spinning "red" is 0.4 and the probability of spinning "yellow" is 0.2.

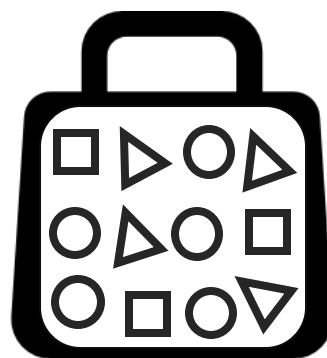


ACTION

RESPONSE

Write down the probability of picking the following:

- | | |
|---------------|-------------------------|
| 1. A circle | 4. A pentagon |
| 2. A triangle | 5. A square or circle |
| 3. A square | 6. A circle or triangle |



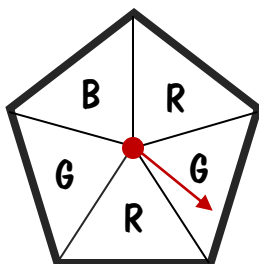
Fluency



Reasoning



Which event is least likely? Which events are equally likely? Explain your answers:



Problem Solving



Design a spinner with 5 sectors where the probability of spinning "red" is 0.4 and the probability of spinning "yellow" is 0.2.

