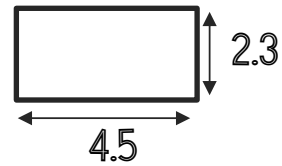


Express 110 as a product of its prime factors

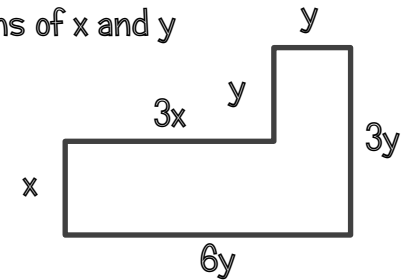
Find the lowest common multiple of 25 and 45

Calculate the area



Estimate £21.75 x 45

a) Express the perimeter in terms of x and y

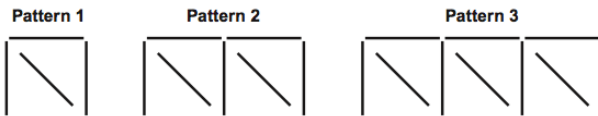


Multiply Out:

a)  $3x(4x - 3)$

b)  $(x - 5)(x - 7)$

The diagram shows a pattern made out of matchsticks.

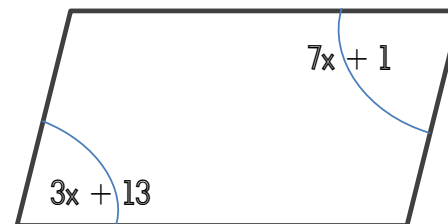


a) Find the nth term for the number of matchsticks

b) How many matchsticks will be in the 9th pattern in the sequence?

a) Solve:  $5x - 6 = 3x - 5$

b) Find x



Simplify:

a)  $\frac{2p^3 \times 6p^6}{4p^3}$

Teacher Feedback

WWW:

Target:

Date:

R A G