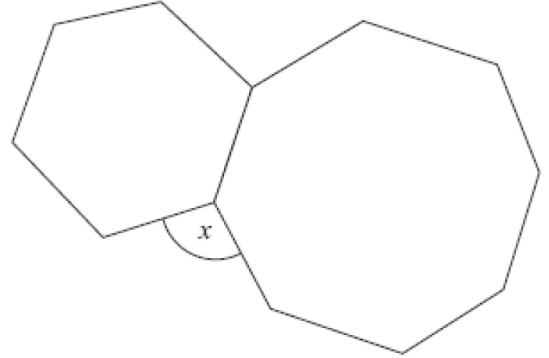


5.1 Starting Six

Work out $3\frac{1}{3} \div 1\frac{1}{4}$

Work out the size of angle x



The diagram shows a regular hexagon and a regular octagon.

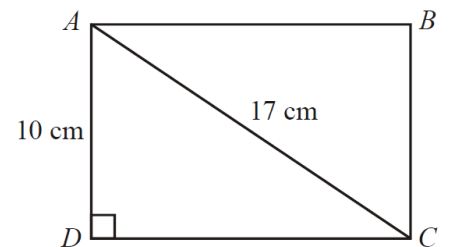
Write the number 40,000,000 in standard form.

Write 1.4×10^{-5} as an ordinary number.

Solve: $3x - 1 = 13x - 5$

Expand and Simplify

$$(2x + 1)(x + 2)(x + 3)$$



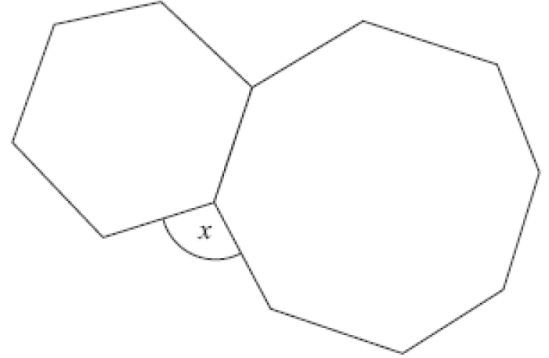
$ABCD$ is a rectangle.
 $AC = 17$ cm.
 $AD = 10$ cm.

Calculate the length of the side CD .
Give your answer correct to one decimal place.

5.1 Starting Six

Work out $3\frac{1}{3} \div 1\frac{1}{4}$

Work out the size of angle x



The diagram shows a regular hexagon and a regular octagon.

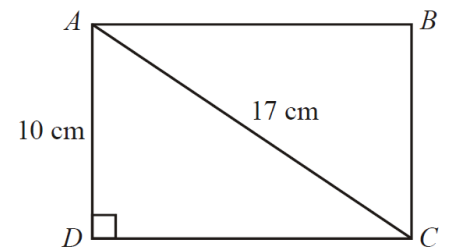
Write the number 40,000,000 in standard form.

Write 1.4×10^{-5} as an ordinary number.

Solve: $3x - 1 = 13x - 5$

Expand and Simplify

$$(2x + 1)(x + 2)(x + 3)$$



$ABCD$ is a rectangle.
 $AC = 17$ cm.
 $AD = 10$ cm.

Calculate the length of the side CD .
Give your answer correct to one decimal place.