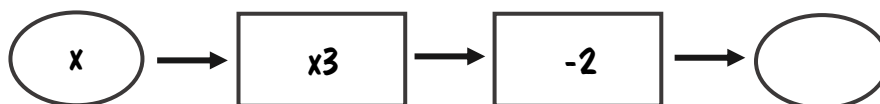


ACTION

RESPONSE

Fluency



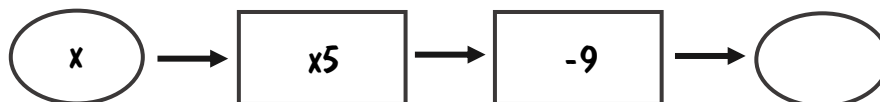
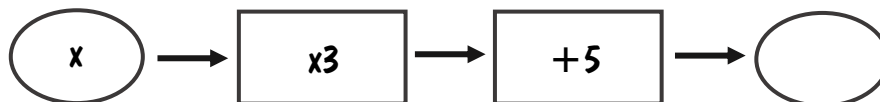
Find the output if x is a) 5 b) 10 c) 2 d) 20 e) -2

Find the input if the output is: f) 10 g) 26 h) 67 i) -17

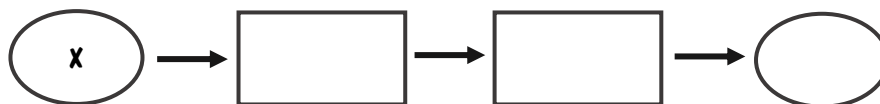
Reasoning



What input can be used on the following function machines to give the same output?



Put two functions in the rectangles so that an input of 4 gives an output of 11. Find other solutions and explain your approach.



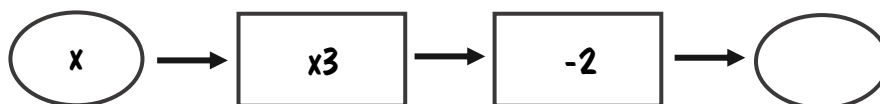
Problem Solving



ACTION

RESPONSE

Fluency



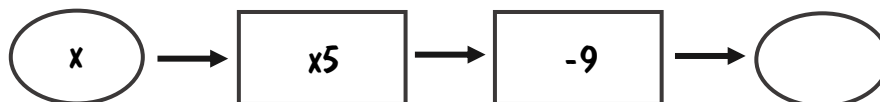
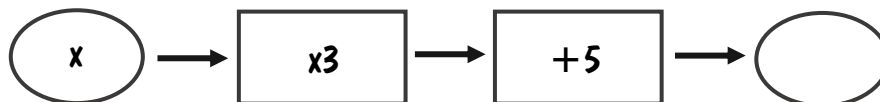
Find the output if x is a) 5 b) 10 c) 2 d) 20 e) -2

Find the input if the output is: f) 10 g) 26 h) 67 i) -17

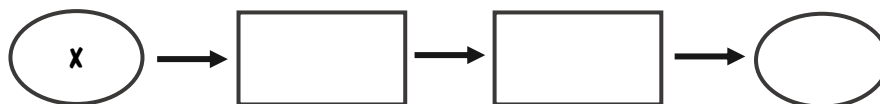
Reasoning



What input can be used on the following function machines to give the same output?



Put two functions in the rectangles so that an input of 4 gives an output of 11. Find other solutions and explain your approach.



Problem Solving

