

# ACTION

# RESPONSE

### Fluency



1.  $2(x + 5)$

4.  $2x(5x - 7)$

7.  $6x(2x - 3)$

2.  $3(x - 4)$

5.  $3x(8 - 9x)$

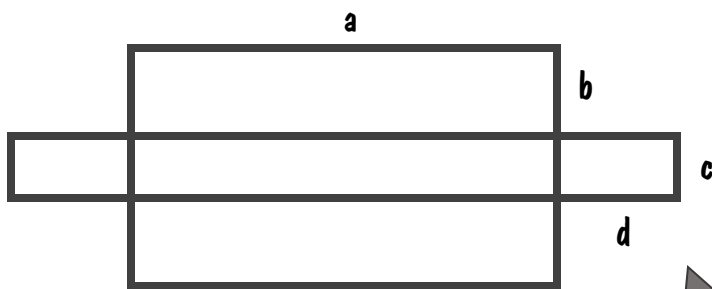
8.  $3x(xy - 2x)$

3.  $5x(x + 4)$

6.  $5y(2y + 14x)$

9.  $5xy(2y + 4xy)$

### Reasoning



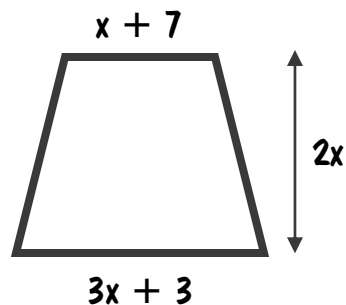
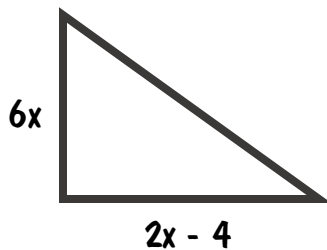
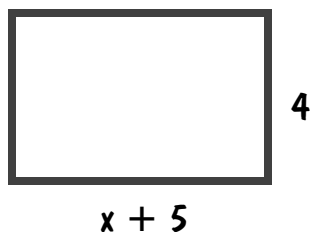
Shade the area shown by the expression:

$$2(ab + cd)$$

### Problem Solving



Find the area of the following shapes in terms of  $x$ .



# ACTION

# RESPONSE

### Fluency



1.  $2(x + 5)$

4.  $2x(5x - 7)$

7.  $6x(2x - 3)$

2.  $3(x - 4)$

5.  $3x(8 - 9x)$

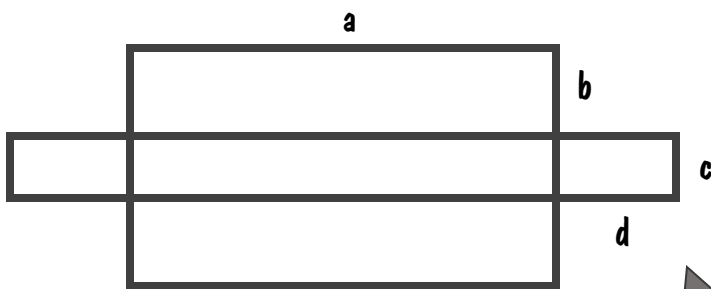
8.  $3x(xy - 2x)$

3.  $5x(x + 4)$

6.  $5y(2y + 14x)$

9.  $5xy(2y + 4xy)$

### Reasoning



Shade the area shown by the expression:

$$2(ab + cd)$$

### Problem Solving



Find the area of the following shapes in terms of  $x$ .

