

Q1

Round 34,565 to the nearest 1000.

1



Q2

How many minutes are in 4.5 hours?

2



Q3


Write 6.5459 correct to 2 decimal places

3



Q4

Draw a chord



4



Q5

Write  $\frac{3}{5}$  as a percentage

1



Q6

7, 8, 4, 9

Write the largest 4 digit even number

2



Q7

Write in size order  
4.25, 4.02, 4.205, 4.2

3



Q8


Write 3.4556 correct to 3 significant figures

4



Q9

Draw a tangent



1



Q10

Work out  $1.6^2$



2



Q11

Work out 30% of £64

3



Q12

5, 3, 4, 8

Write the smallest 4 digit  
odd number

4



Q13

There are 4 coloured pens in  
a box: red, blue, green and  
yellow. 2 are taken. Write all  
the possible combinations.

1



Q14

Write down the 19<sup>th</sup> odd  
number

2



Q15

Write in size order  
4, -2, -4, 2, 0

3



Q16

$\frac{3}{5}$  of sweets are red  
and the rest are blue.  
Write the ratio blue to red.

4



**Q17** Write the value of 4 in the number 5432

1

**Q18** Write 375ml in litres



2

**Q19** 10 , 36 , 7 , 42 , 18  
Circle a multiple of 4

3

**Q20** 43 children, 18 are girls.  
What is the probability of picking boy?

4

**Q21** What is the probability of rolling a 4 on a regular 6 sided dice?

1

**Q22** Simplify  
 $3x - 4y + 5x - 7y$

2

**Q23** Expand  
 $3x(4 - x)$


3

**Q24** 14 , 11 , 8 , 5  
Write the next term

4

Q25

Draw a radius



1



Q26

Write down an even cube number

2



Q27



Write  $\frac{7}{16}$  as a decimal

3



Q28

Solve

$$3x - 7 = 11$$

4



Q29



Convert  $2500\text{mm}^2$  into  $\text{m}^2$

1



Q30

Write 0.047 as a fraction

2



Q31

Factorise

$$8n - 6$$

3



Q32

Write down all the factors of 24

4

