

Q1

Round 36,445 to the nearest 100.

1



Q2

How many minutes are in 3.5 hours?

2



Q3


Write 3.7449 correct to 2 decimal places

3



Q4

Draw a radius



4



Q5

Write $\frac{4}{5}$ as a percentage

1



Q6

7, 6, 2, 3

Write the largest 4 digit even number

2



Q7

Write in size order
0.15, 0.01, 0.105, 0.1

3



Q8


Write 24.456 correct to 3 significant figures

4



Q9

Draw a segment



1



Q10

Work out 1.9^2



2



Q11

Work out 60% of £12

3



Q12

9, 3, 8, 2

Write the smallest 4 digit
odd number

4



Q13

There are 4 fruits in a box:
apple, plum, grape and
banana. 2 are taken. Write
all the possible combinations.

1



Q14

Write down the 17th odd
number

2



Q15

Write in size order
6, -2, -3, 4, 0

3



Q16

$\frac{3}{7}$ of sweets are red
and the rest are blue.
Write the ratio blue to red.

4



Q17 Write the value of 4 in the number 54,832

1

Q18 Write 3750ml in litres



2

Q19 10, 36, 16, 41, 28
Circle a multiple of 7

3

Q20 63 children, 27 are girls.
What is the probability of picking boy?

4

Q21 What is the probability of rolling a number less than 4 on a regular 6 sided dice?

1

Q22 Simplify
 $5x - 4y + 2x + 3y$

2

Q23 Expand
 $2x(6 - 3x)$

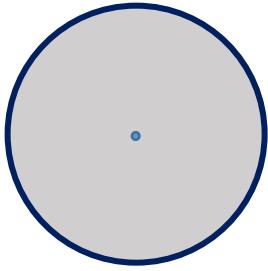
3

Q24 17, 12, 7, 2
Write the next term

4

Q25

Draw a diameter



1



Q26

Write down an odd cube number

2



Q27



Write $\frac{9}{16}$ as a decimal

3



Q28

Solve

$$4x - 8 = 28$$

4



Q29



Convert 3500mm^2 into m^2

1



Q30

Write 0.031 as a fraction

2



Q31

Factorise

$$10n - 4$$

3



Q32

Write down all the factors of 36

4

